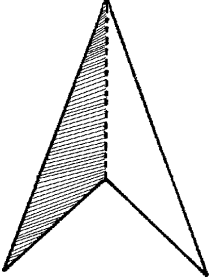
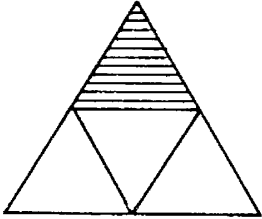
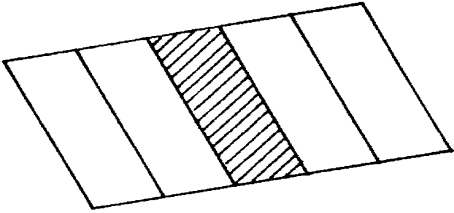
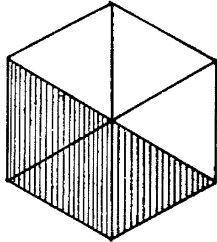
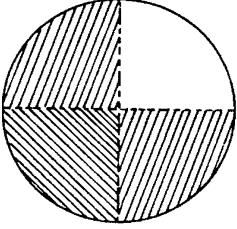
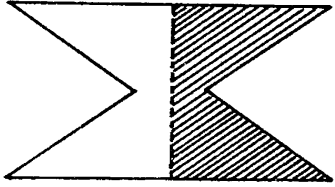
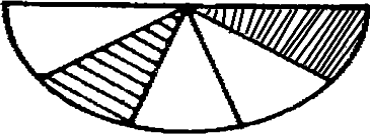
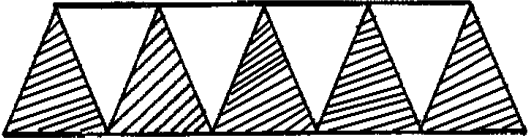
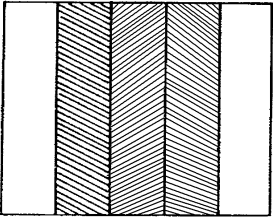
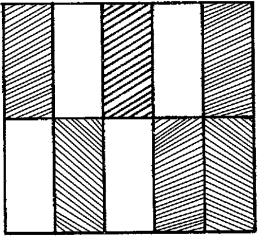


ANSWER SHEET

Revision exercises: Fractions

MATHEMATICS

What **fraction** is **shaded** in each of the following diagrams?

<p>(a) </p> <p style="text-align: right;">Answer : $\frac{1}{2}$</p>	<p>(b) </p> <p style="text-align: right;">Answer : $\frac{1}{4}$</p>
<p>(c) </p> <p style="text-align: right;">Answer : $\frac{1}{5}$</p>	<p>(d) </p> <p style="text-align: right;">Answer : $\frac{3}{6}$</p>
<p>(e) </p> <p style="text-align: right;">Answer : $\frac{3}{4}$</p>	<p>(f) </p> <p style="text-align: right;">Answer : $\frac{1}{2}$</p>
<p>(g) </p> <p style="text-align: right;">Answer : $\frac{2}{5}$</p>	<p>(h) </p> <p style="text-align: right;">Answer : $\frac{5}{9}$</p>
<p>(i) </p> <p style="text-align: right;">Answer : $\frac{3}{5}$</p>	<p>(j) </p> <p style="text-align: right;">Answer : $\frac{6}{10}$</p>